

Contents

Section I

Overview	
1. Rate and Unit Price	6
2. Ratio and Rate.....	10
3. Introducing Percent	14
4. Relating Fractions to Decimals, Percents, Rates, and Ratios	18
5. Calculating Percents.....	22
6. Adding and Subtracting Decimals.....	26
7. Multiplying and Dividing Decimals	30
8. Estimating Answers to Operations with Decimals.....	34
Midway Review	38
9. More Operations with Decimals	42
10. Equivalent Fractions, Simplifying and Comparing Fractions.....	46
11. Adding and Subtracting Fractions with Common Denominators	50
12. Adding Fractions with Unlike Denominators	54
13. Subtracting Fractions with Unlike Denominators.....	58
14. Multiplying Fractions by Whole Numbers	62
15. Dividing Whole Numbers by Fractions	66
16. More Operations with Fractions	70
Final Review	74

Section II

Overview	
1. Place Value	80
2. Divisibility.....	84
3. GCF and LCM	86
4. Fractions	90
5. Decimals.....	94
6. Percents	98
7. Area and Perimeter.....	102
8. Circles	104
9. Angles	106
10. Triangles.....	110
Midway Review	112
11. Squares and Roots.....	118
12. Number Patterns.....	120
13. Simple Equations	124
14. Ratios and Scale Drawings.....	128
15. Rates	132
16. Circle Graphs.....	136

17.	Analysis of Data.....	138
18.	Probability	140
19.	Coordinates and Transformations.....	142
	Final Review	144

Section III

	Overview	
1.	Mixed Operations with Whole Numbers	152
2.	Multiples and Factors.....	156
3.	Addition and Subtraction of Fractions	162
4.	Addition and Subtraction of Decimals.....	166
5.	Multiplication and Division of Decimals	168
	Midway Review	172
6.	Operations with Decimals	176
7.	Percents, Decimals, and Fractions.....	180
8.	Ratio and Rate.....	184
9.	Patterns	188
10.	Equations.....	192
	Final Review	196

Section IV

	Overview	
1.	Units of Measure	202
2.	Operations with Money.....	204
3.	Time, Distance, and Speed	208
4.	Perimeter and Area.....	210
5.	Volume.....	214
6.	Two- and Three-Dimensional Figures.....	218
	Midway Review	222
7.	Coordinates	226
8.	Transformations	230
9.	Graphs.....	234
10.	Analysis of Data.....	238
11.	Probability	242
	Final Review	246
	Parents' Guide	251
	Answers	255

1

Rate and Unit Price

EXAMPLE

Which is the better buy? 3 pounds of tomatoes for \$3.78 or 5 pounds for \$5.95?

3 lb for \$3.78 :

$$3.78 \div 3 = 1.26$$

The unit price is \$1.26 per pound.


5 lb for \$5.95 :

$$5.95 \div 5 = 1.19$$

The unit price is \$1.19 per pound.

$$\begin{array}{r} 1.26 \\ 3 \overline{)3.78} \\ \underline{3} \\ 7 \\ \underline{6} \\ 18 \\ \underline{18} \\ 0 \end{array}$$

$$\begin{array}{r} 1.19 \\ 5 \overline{)5.95} \\ \underline{5} \\ 9 \\ \underline{5} \\ 45 \\ \underline{45} \\ 0 \end{array}$$



HINTS:

- Rate is a comparison between quantities of different units.
e.g. \$0.65 per box; 0.5 qt per person; 0.05 mm/sheet; \$1.69/lb
- To calculate the unit price, divide the total cost by the amount. Then round the answer to the nearest cent if necessary.
- Remember to put the decimal point in the correct place in the product or quotient when doing multiplication or division with decimal numbers.
- To round a number, the digit immediately after the digit to be retained must be considered.


Find the unit price for each item mentally.

①



\$ _____ / bag

②



\$ _____ / box

③



\$ _____ / bottle

④




\$ _____ / can

⑤



\$ _____ / packet

⑥



\$ _____ / apple

⑦



\$ _____ / bottle

⑧



\$ _____ / bag

Calculate the unit price for each item. Round to the nearest cent if necessary.

Unit Price

- ⑨ 2 kilograms of cereal for \$5.20 \$ _____
- ⑩ 5 bars of chocolate for \$4.50 \$ _____
- ⑪ 3 notebooks for \$1.75 \$ _____
- ⑫ 2 CDs for \$24.80 \$ _____
- ⑬ 2 pizzas for \$12.40 \$ _____
- ⑭ 6 spicy chicken wings for \$4.99 \$ _____

Calculate the total cost for each purchase.

Total Cost

- ⑮ 3 bottles of orange juice at \$0.79 each \$ _____
- ⑯ 5 ten-pack pencils at \$0.87 each \$ _____
- ⑰ 4 T-shirts at \$4.99 each \$ _____
- ⑱ 6 hamburgers at \$2.60 each \$ _____
- ⑲ 2 boxes of laundry detergent at \$7.96 each \$ _____
- ⑳ 8 correction pens at \$3.75 each \$ _____

Find the unit price for each quantity. Round to the nearest cent if necessary. Put a ✓ in the box for the better buy.

Item	Total Cost	Unit Price	Better Buy
⑳ Orange juice	3 cans for \$1.95		
	4 cans for \$2.65		
㉑ Pansy	2 pots for \$4.25		
	3 pots for \$6.35		

Solve the problems. Show your work. Round your answers to the nearest hundredth if necessary.

- ⑳ Susanne's hair grows 0.32 inch per month. How long does it grow in 6 months?

It grows _____ inches in 6 months.

- ㉑ Peggy saves \$12.50 per week. How much can she save in 5 weeks?

- ㉒ Gas sells at \$2.49 per gallon. How much do 4 gallons cost?

- ㉓ Brenda buys 2 quarts of spring water for \$1.42. What is the price per quart?

- ㉔ Mark builds a 24.4-yard long fence using 9 posts. How far apart are two adjacent posts?

- ㉕ Bill buys 2 pairs of shoes at \$39.95 per pair. How much does he pay?

- ㉖ 6 friends go to Disneyland. They spend \$87.00 altogether. How much does each spend if each spends an equal amount?

⑩ 2.5 quarts of soda is divided equally among 8 friends. How much does each drink?

⑪ Kate drinks 2 glasses of milk daily. Each glass contains 0.3 quart of milk. How much milk does she drink per week?

⑫ Susan earns \$22.50 for 5 hours of babysitting. Bob earns \$12.75 for 3 hours. Who is better paid?

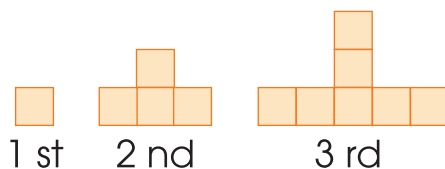
⑬ 3 T-shirts are sold for \$14.70.
a. What is the price for each T-shirt?

b. How much do 5 T-shirts cost?

⑭ Baby Sue weighed 3.2 kilograms at birth. She gains 150 grams per week. How many kilograms does she weigh at 6 weeks?



Draw the 6th pattern in the box.



6 th